



Princess Sumaya  
University  
for Technology

King Abdullah II School of Engineering

EE21221  
Electric Circuits (1)  
Section #4

Quiz #5  
Thursday 6/1/2022

Name: .....



Q.1) The switch in the circuit of Figure Q.1 has been closed for a long time. At  $t=0$ , the switch is opened. Calculate  $i(t)$  for  $t>0$ . [4-Points]

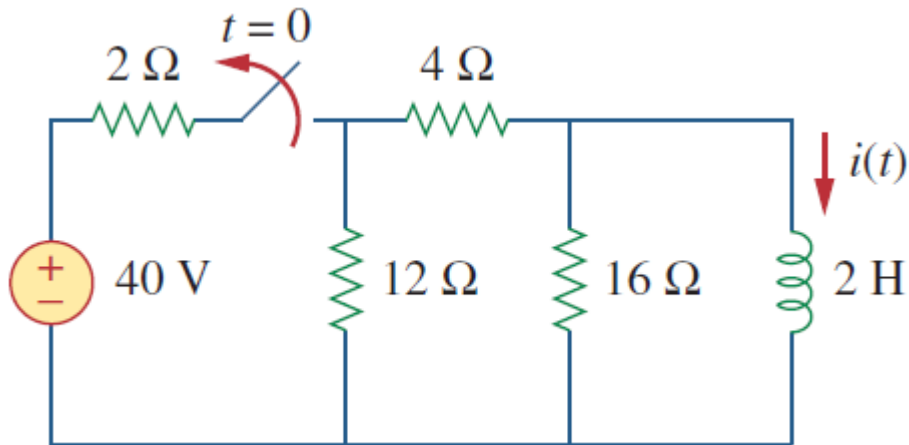
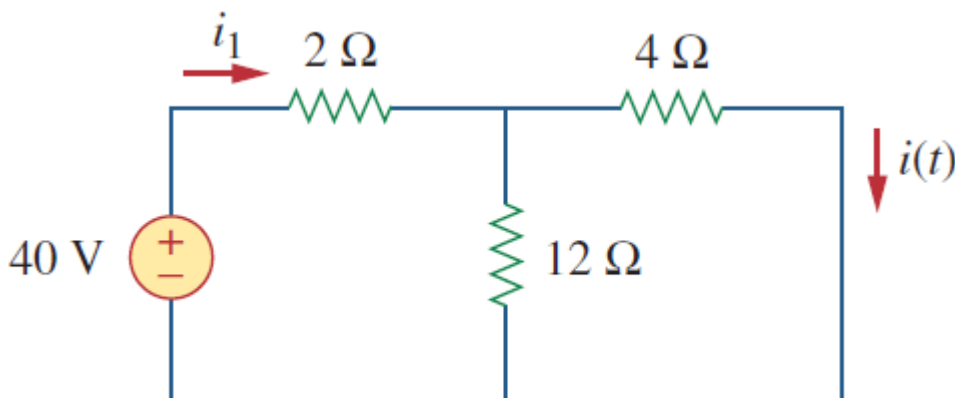
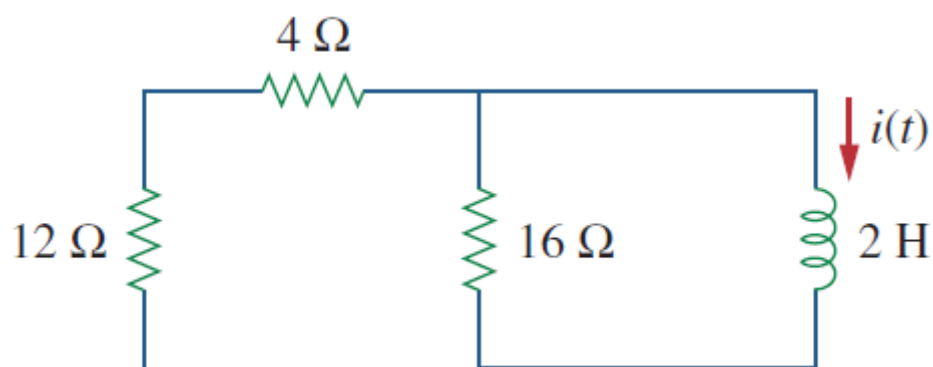


Figure Q.1

Solution:





When  $t < 0$ ,

$$\frac{4 \times 12}{4 + 12} = 3 \, \Omega$$

$$i_1 = \frac{40}{2 + 3} = 8 \, \text{A}$$

using current division,

$$i(t) = \frac{12}{12 + 4} i_1 = 6 \, \text{A}, \quad t < 0$$

$$i(0) = i(0^-) = 6 \, \text{A}$$

When  $t > 0$ ,

$$R_{\text{eq}} = (12 + 4) \parallel 16 = 8 \, \Omega$$

$$\tau = \frac{L}{R_{\text{eq}}} = \frac{2}{8} = \frac{1}{4} \, \text{s}$$

$$i(t) = i(0)e^{-t/\tau} = 6e^{-4t} \, \text{A}$$

Q.2) The switch in Figure Q.2 has been in position A for a long time. At  $t=0$ , the switch moves to B. Determine  $v(t)$  for  $t>0$  and calculate its value at  $t=1$  s and 4 s. [6-Points]

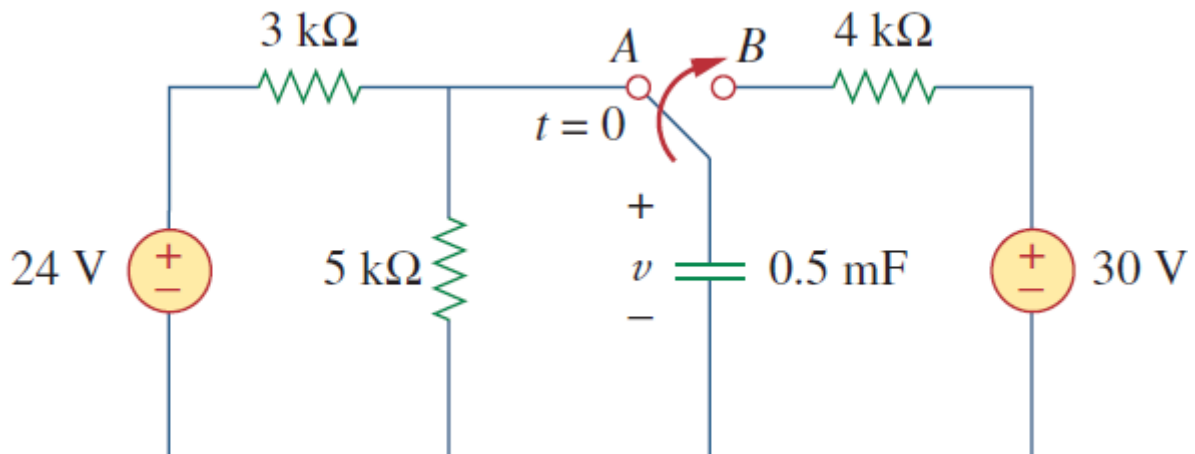


Figure Q.2

**Solution:**

$i =$

For  $t < 0$ ,

$$v(0^-) = \frac{5}{5+3}(24) = 15 \text{ V}$$

$$v(0) = v(0^-) = v(0^+) = 15 \text{ V}$$

For  $t > 0$ ,

$$R_{Th} = 4 \text{ k}\Omega,$$

$$\tau = R_{Th}C = 4 \times 10^3 \times 0.5 \times 10^{-3} = 2 \text{ s}$$

$$v(\infty) = 30 \text{ V}.$$

$$\begin{aligned} v(t) &= v(\infty) + [v(0) - v(\infty)]e^{-t/\tau} \\ &= 30 + (15 - 30)e^{-t/2} = (30 - 15e^{-0.5t}) \text{ V} \end{aligned}$$

At  $t = 1$ ,

$$v(1) = 30 - 15e^{-0.5} = 20.9 \text{ V}$$

At  $t = 4$ ,

$$v(4) = 30 - 15e^{-2} = 27.97 \text{ V}$$